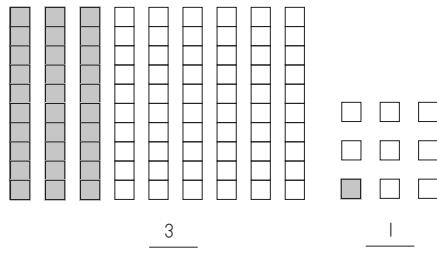
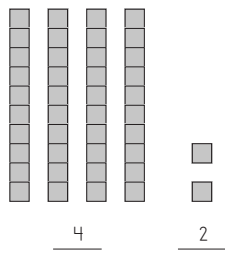


### Lesson Practice 9A

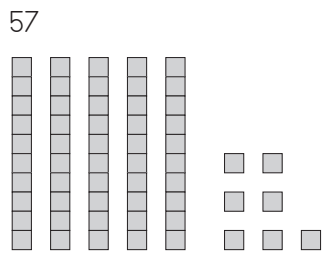
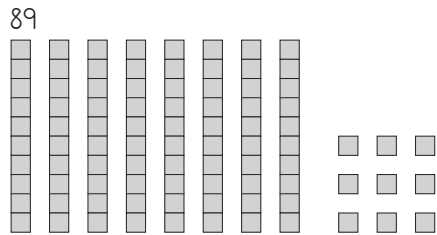
Colour the correct number of blocks. Say the number.



Count and write, and then say the number.

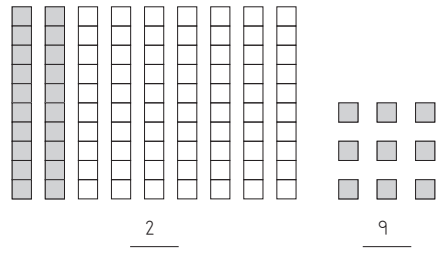


Build and say the numbers.

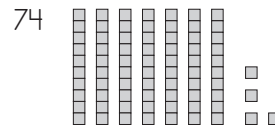
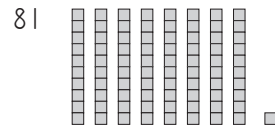


### Systematic Review 9D

Colour the correct number of blocks. Say the number.




Build and say the numbers.



Count the shapes. Circle and say the correct number.

How many triangles are there?  $\triangle$



0 1 2 3 4 5 6 7 **8** 9