



# Student Solutions

## Lesson Practice 1A

LESSON PRACTICE 1A

Count the blocks and circle the correct number.

0 1 **2** 3 4 5 6 7 8 9

---

0 1 2 3 4 5 **6** 7 8 9

PRIMER LESSON PRACTICE 1A 5

LESSON PRACTICE 1A


0 1 2 3 **4** 5 6 7 8 9


6 PRIMER


## Systematic Review 1D

SYSTEMATIC REVIEW 1D

Count and circle the correct number.









0 1 2 3 4 5 6 **7** 8 9

---







0 1 2 3 **4** 5 6 7 8 9

PRIMER SYSTEMATIC REVIEW 1D 11

SYSTEMATIC REVIEW 1D





0 1 2 3 4 5 **6** 7 8 9

12 PRIMER